

# Summer Work

Incoming 2<sup>nd</sup> Grade

# Reading suggestions

## Grade 1 Series Books

The Feather Chase

Mercy Watson

Freddy Fernortner

Here's Hank

Frog and Toad

Henry and Mudge

Geronimo Stilton

Ivy and Bean

Princess in Black

Mr. Putter and Tabby

Katie Woo

Max and Zoe

Diary of a Pug

Yasim

Pedro

Adventures According to Humphrey

Magic Treehouse

Hey Jack

Buddy Files

Ready Freddy

Lulu

The Boxcar Children

The Bailey School Kids

Wedgie and Gizmo

Narwhal

Eerie Elementary

Princess Truly

Marvin Redpost

Horrible Harry

The Littles

Owl Diaries

Dragonmasters

Notebook of Doom

# SUMMER BREAK READING BINGO CHALLENGE



READ A BOOK WEARING SUGLASSES	READ A BOOK ABOUT TRAVELING	READ FOR 15 MINUTES	READ UNDER A TREE	READ NONFICTION
READ ABOUT WATER	READ ABOUT CAMPING OR IN A TENT	READ IN THE KITCHEN	READ YOUR FAVORITE BOOK	READ TO SOMEONE
READ AFTER LUNCH	READ A MYSTERY BOOK	 FREE SPACE	READ A JOKE BOOK	READ NEAR A PARK
READ ABOUT THE SUN	READ IN YOUR FAVORITE OUTSIDE SPOT	READ SOMETHING NEW TO YOU	HAVE SOMEONE READ TO YOU	READ BY THE POOL
READ IN THE SHADE	READ A FUNNY BOOK	SHARE THE BEST PART OF YOUR BOOK WITH SOMEONE	READ ABOUT AN ADVENTURE	READ A FICTION BOOK

Name :-----

Summer

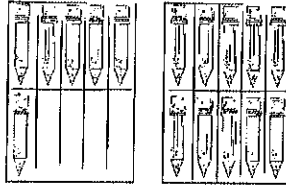
Week :-----

Write the numbers with these two digits.

9

7

Write the number of tens and ones.




\_\_\_ Ten(s)

\_\_\_ one(s)

Fill in the missing places.

$5 + 9 + 6 = \_$


Count the fruits and graph.



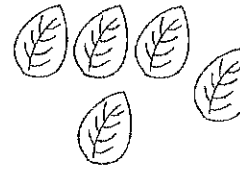


Use tally marks to show the number

27

Write before and after

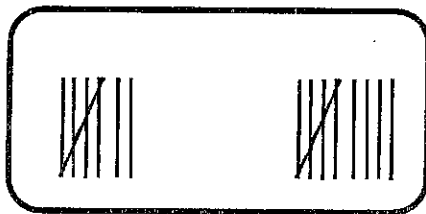


Complete the addition sentence.





+ =

Write the addition and subtraction sentences and then write the correct sign.



\_\_\_ + \_\_\_ = \_\_\_



\_\_\_ - \_\_\_ = \_\_\_

Name :-----

Summer

Week :-----


Write the number of tens and ones.

Tens	Ones

Write the  $<=>$ .


99 66

Color by the code.



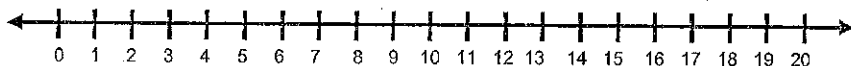
15	Brown
6	Pink
8	Yellow

Write the time.




— : —

The monkey had 18 bananas.  
He ate three of them. How many bananas does he have left?  
Show on the number line.



Equation is:



Solve this problem.

$12 + 58 =$

Tens	Ones

Color the cups. Then choose the correct answer.



Yellow

Blue

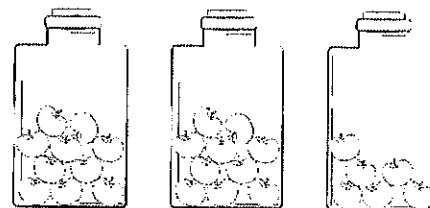
Green

Red

The red cup is \_\_\_\_\_

- Tallest
- Shortest
- Same size

Cross out the wrong number.



26

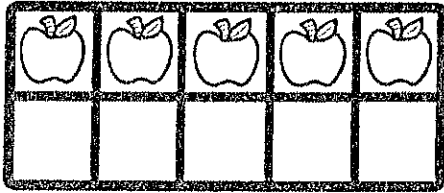
16

Name : .....

Summer

Week : .....

Make ten.



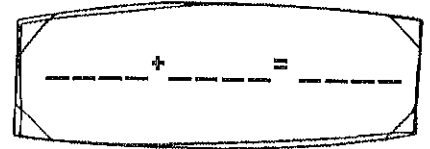
\_\_\_\_\_ + \_\_\_\_\_ = 10

Draw a shape like this object.




Write the expanded form.

39



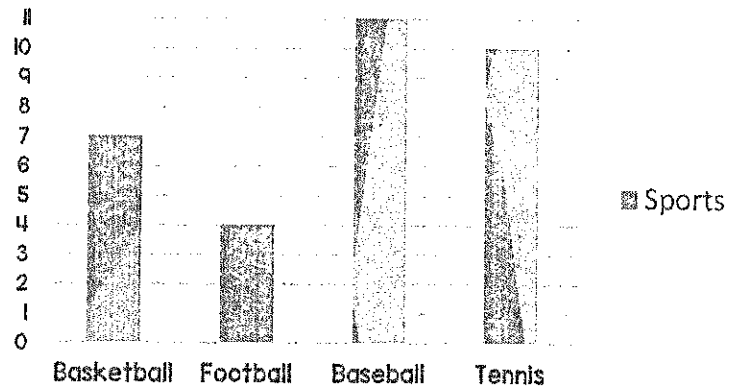
\_\_\_\_\_ tens and \_\_\_\_\_ ones.



I have ----- Sides  
and ----corners.

Look at the chart and then answer the question.

Favorite sports in the school.



How many students play baseball?

Count by 3's.

6, , , ,


Write four different facts



□	+	□	=	□
□	+	□	=	□
□	-	□	=	□
□	-	□	=	□

Write the subtraction sentence.

\_\_\_\_\_ - \_\_\_\_\_ = \_\_\_\_\_



Write the number of tens and ones.

Tens	Ones

Write the  $< = >$ .

$30 - 2$   $26 + 2$

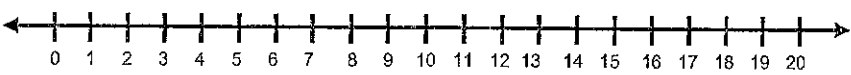
Color by the code.

14	11	7	3
Brown	Green	Red	Yellow

Write the time.

\_ : \_

9 parrots were sitting on the branch of the tree. 2 of them flew away. How many parrots are there on the tree?  
Show on the number line.



Equation is:



Solve this problem.

$36 + 25 =$

Tens	Ones

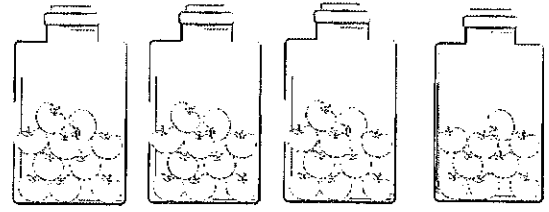
Color the cups. Then choose the correct answer.

Yellow
Blue
Green
Red

The yellow cup and green cup are \_\_\_\_\_

- Tallest
- Shortest
- Same size

Cross out the wrong number.



29

39

Name :-----

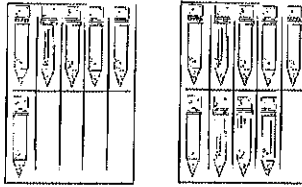
Summer

Week :-----

Write the numbers with these two digits.

8  
3

Write the number of tens and ones.

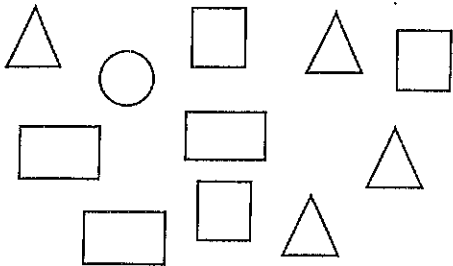


\_\_\_ Ten(s)  
\_\_\_ one(s)

Fill in the missing places.

$7 + 1 + 3 = \_$


Count the shapes and graph.






Use tally marks to show the number

32

Write before and after



Complete the addition sentence.



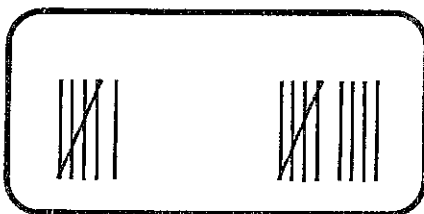
+





=



Write the addition and subtraction sentences and then write the correct sign.



\_\_\_ + \_\_\_ = \_\_\_



\_\_\_ - \_\_\_ = \_\_\_



Name : .....

Summer

Week : .....

65

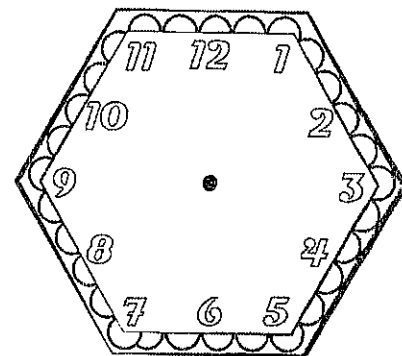
One Less

One More

Solve this problem.

5 + 5 + 5 = ○

Draw the hands.



6:30


Compare the numbers.

44 ○ 91



Count by 10's.

10					
----	--	--	--	--	--

Draw a triangle in side this shape.



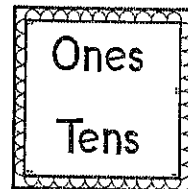
Write the number .




Seventy-four

circle the value of the underlined digit .

51



Make the number bond.



10 dogs are playing. 3 dogs run away. How many dogs are left?

Show on the ten frames.

Equation is:


Name :-----

Summer

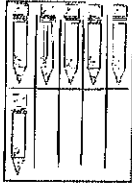
Week :-----

Write the numbers with these two digits.

6

5

Write the number of tens and ones.




\_\_\_ Ten(s)

\_\_\_ one(s)

Fill in the missing places.

$3 + 2 + 5 = \_$


Count the bugs and graph.




Use tally marks to show the number

42

Write before and after



Complete the addition sentence.



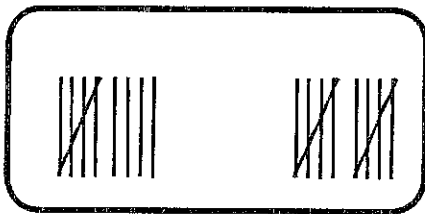
+





=



Write the addition and subtraction sentences and then write the correct sign.



\_\_\_ + \_\_\_ = \_\_\_




\_\_\_ - \_\_\_ = \_\_\_

Name : .....

Summer

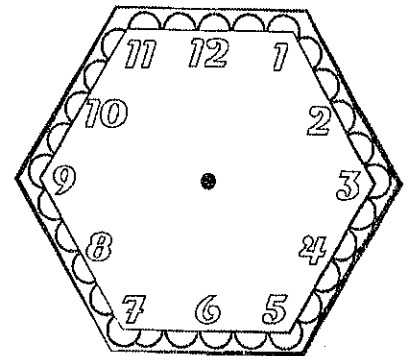
Week : .....



Solve this problem.

$5 + 5 + 10 = \bigcirc$

Draw the hands.




12:00

Compare the numbers.

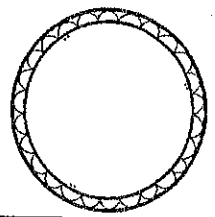

32  $\bigcirc$  28

40						
----	--	--	--	--	--	--

Draw a square inside this shape.




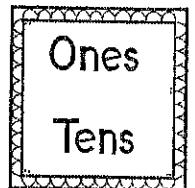
Write the number.



Eighty-eight

circle the value of the underlined digit.

78



Tom has 16 books to read this summer. He has read 5 of them so far. How many does he have left to read? Show on the ten frames.


Equation is:

Make the number bond.

